




# **Year 2 Maths 10/07/2020**



# Fluency

## 2D shape riddle

Can you come up  
with your own 2D  
shape riddle for  
someone to solve?








# Your task...

Now you are adding and subtraction SUPERSTARS we would like you to create your own board game today.  
It has to be themed on adding and subtracting two digit numbers.

Here are some ideas below:

	20 - 10	Move forward one place!	20 - 13	15 - 4
				18 - 16
20 - 12	19 - 15	100 - 78	13 - 12	Miss a turn!
16 - 10				
Go back three places!	20 - 16	Move forward two places!	16 - 12	17 - 15
				17 - 10
	19 - 14	14 - 12	20 - 11	Move forward two places!



Be as creative as you like!!!!



**To finish things off...**

We would love to see a picture of your AMAZING board games.

