

Section 1

one less

one more

12

24


33

Section 4

There are 7 eggs in a basket.

The hen lays 3 more.

How many eggs are there now?



Section 2

$4 + 1 = \text{ } + \text{ }$

$3 + 3 = \text{ } + \text{ }$

Section 3

Circle the ones.

72 49 27

Section 5

Using a ruler draw a line of symmetry on this shape.



Section 6

What comes next?

4, 6, 8, , ,

Section 7

Match up the sum to the answer.

$14 + 1$

12

$3 + 4$

15

$7 + 5$

7

Section 8

Which line is the longest?

A 

B 

C 

Line ____ is the longest.

Section 1

one less one more


11 12 13

23 24 25

32 33 34

Section 4

There are 7 eggs in a basket.
The hen lays 3 more.
How many eggs are there now?



10

Section 6

What comes next?

4, 6, 8, 10 , 12 , 14

Section 2 example answers

$4 + 1 = 3 + 2$

$3 + 3 = 4 + 2$

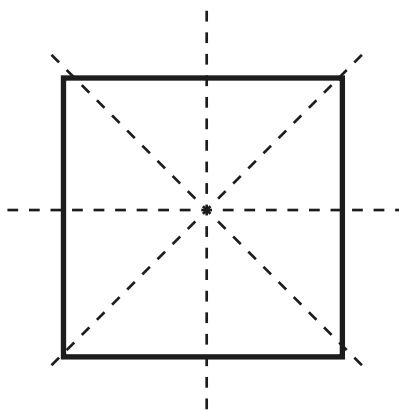
Section 3

Circle the ones.

72 49 27

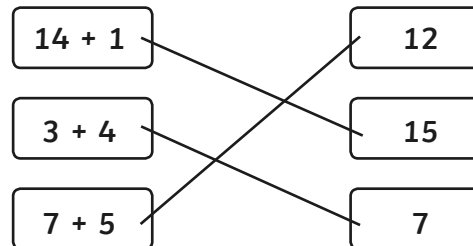
Section 5

Using a ruler draw a line of symmetry on this shape.



Section 7

Match up the sum to the answer.



Section 8

Which line is the longest?

A _____
B _____
C _____

Line A is the longest.

Year 2 Maths Activity Mat: Autumn 1

4

Section 1

one less

one more

50

36

21

Section 4

There are 14 apples.

4 apples have to be thrown away.

How many apples are left?



Section 6

What comes next?

5, 10, 15, , ,


Section 2

$12 + 4 = \text{} + \text{$

$10 + 2 = \text{} + \text{$

Section 5

Using a ruler draw a line of symmetry on this shape.



Section 7

Match up the sum to the answer.

$20 + 3$

60

$52 + 8$

43

$37 + 6$

23

Section 3

Circle the ones.

83

38

44

Section 8

Which line is the shortest?

A 

B 

C 

Line ____ is the shortest.

Section 1

one less one more

49 50 51

35 36 37

20 21 22

Section 4

There are 14 apples.
4 apples have to be thrown away.
How many apples are left?



10

Section 6

What comes next?

5, 10, 15, 20 , 25 , 30

Section 2 example answers

$12 + 4 = 8 + 8$

$10 + 2 = 7 + 5$

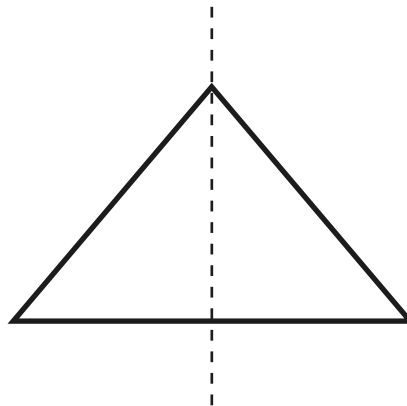
Section 3

Circle the ones.

83 38 44

Section 5

Using a ruler draw a line of symmetry on this shape.






Section 7

Match up the sum to the answer.

$20 + 3$	60
$52 + 8$	43
$37 + 6$	23

Section 8

Which line is the shortest?

- A 
- B 
- C 

Line B is the shortest.

Year 2 Maths Activity Mat: Autumn 1

4

Section 1

one less

one more

81

55

99

Section 4

There are 39 plants.

Five of the plants die.

How many plants are left?



Section 6

What comes next?

16, 26, 36, , ,

Section 2

$53 + 2 = \text{} + \text{$

$15 + 5 = \text{} + \text{$

Section 5

Using a ruler draw a 4 sided shape and then draw the line of symmetry on the shape.

Section 7

Match up the sum to the answer.

$70 + 10$

62

$45 + 7$

52

$58 + 4$

80

Section 3

Circle the ones.

112 104 198

Section 8

Put these lines in order from the shortest to the longest.

A

Line ____ is the shortest.

B

Line ____ is in between.

C

Line ____ is the longest.

Section 1

one less one more

80 81 82

54 55 56

98 99 100

Section 4

There are 39 plants.
Five of the plants die.
How many plants are left?



34

Section 6

What comes next?

16, 26, 36, 46 , 56 , 66

Section 2 example answers

$53 + 2 = 40 + 15$

$15 + 5 = 10 + 10$

Section 3

Circle the ones.

112 104 198

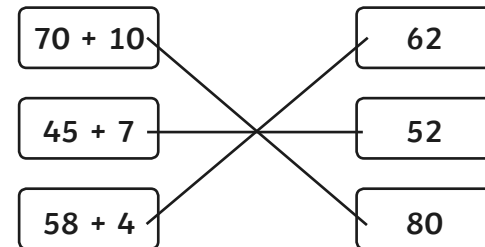
Section 5

Using a ruler draw a 4 sided shape and then draw the line of symmetry on the shape.

A correctly drawn 4 sided shape with the line of symmetry clearly marked.

Section 7

Match up the sum to the answer.



Section 8

Put these lines in order from the shortest to the longest.

A _____

B _____

C _____

Line C is the shortest.

Line A is in between.

Line B is the longest.