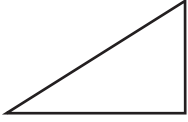
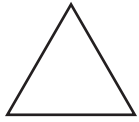
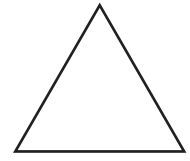
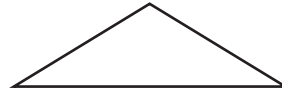
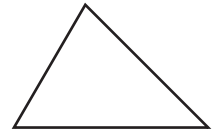
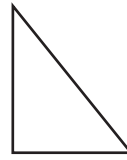


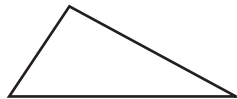
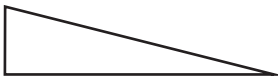
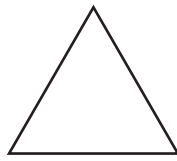
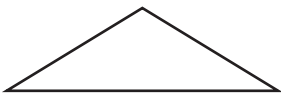
Which is an **isosceles triangle**?



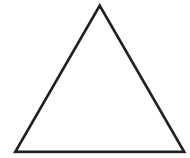
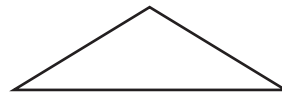
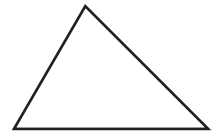
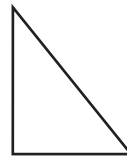
Which is an **equilateral triangle**?



Which is a **right-angled triangle**?



Which is a **scalene triangle**?



Complete the sentence

A triangle has sides

and angles

A **right-angled triangle**...

	true	false
has one 90° angle	<input type="checkbox"/>	<input type="checkbox"/>
has two 90° angles	<input type="checkbox"/>	<input type="checkbox"/>
could be scalene	<input type="checkbox"/>	<input type="checkbox"/>
could be equilateral	<input type="checkbox"/>	<input type="checkbox"/>

Complete the sentence

An **equilateral triangle**

has three equal

and three equal

Complete the sentence

A **scalene triangle** has

three sides of

d _____ lengths.