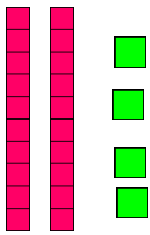
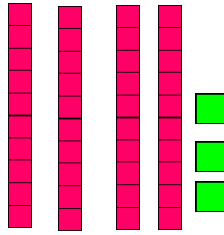


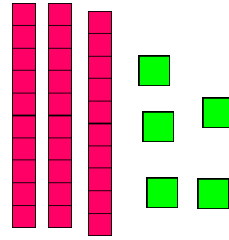
LO: To know what each of the digits in 2-digit numbers represents.

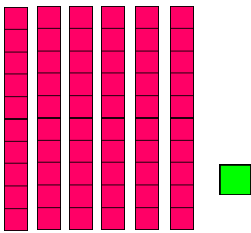
- I can write the 2-digit numbers that are being shown with the dienes
- I can use dienes to make 2 digit numbers

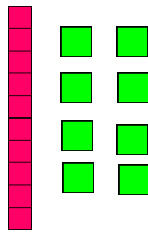
Which 2-digit numbers are being shown with the dienes?










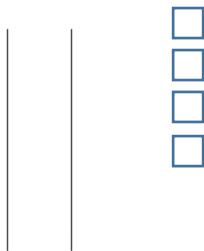




Now choose different **2-digit** numbers. Write them on the top of each column.

Then draw the dienes to go with them underneath. Remember, you can just draw a

Vertical line for the ten rods and smaller squares for each unit/one.



e.g, 24

