

- LO: I can find fractions of a group or a set of objects.
- SC: I count how many parts make a whole. This is the denominator.
- I count how many parts are shaded. This is the numerator.

1. What fraction of the monsters are blue?



2. What fraction of the monsters are yellow?



3. What fraction of the cats are wearing a green hat?



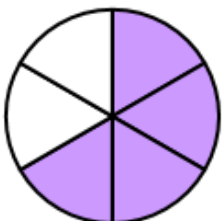
4. Complete the fractions and match them to the representations to make a whole.

$$\frac{2}{\square}$$

$$\frac{1}{\square}$$

$$\frac{3}{\square}$$

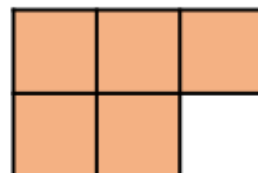
A.



B.


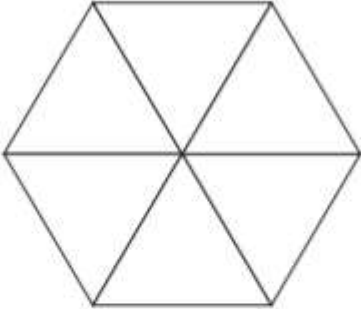
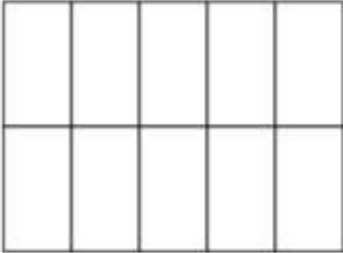


C.



- LO: I can find fractions of a group or a set of objects.
- SC: I count how many parts make a whole. This is the denominator.
- I count how many parts are shaded. This is the numerator.

Colour the windows to match the fractions listed.

		
<p>$\frac{1}{5}$: red $\frac{2}{5}$: green $\frac{2}{5}$: blue</p>	<p>$\frac{1}{6}$: green $\frac{2}{6}$: yellow $\frac{3}{6}$: blue</p>	<p>$\frac{1}{10}$: blue $\frac{2}{10}$: yellow $\frac{3}{10}$: red $\frac{4}{10}$: green</p>

Challenge:

Circle $\frac{1}{5}$ of the beanbags.



Circle $\frac{3}{5}$ of the beanbags.



What's the same and what's different about $\frac{1}{5}$ and $\frac{3}{5}$?