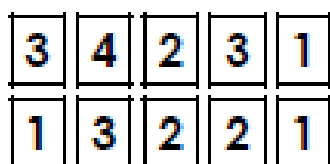


Challenge

8a. Choose number cards to fill in the 24-hour clocks with two times which match the analogue clock.



		:					:		
--	--	---	--	--	--	--	---	--	--



VP

8b. Choose number cards to fill in the 24-hour clocks with two times which match the analogue clock.



		:					:		
--	--	---	--	--	--	--	---	--	--

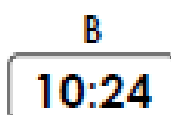


VP

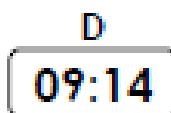
9a. Which of these times is the earliest?
Which of these times is the latest?



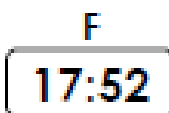
(pm)



(pm)



(am)

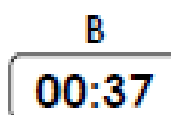


VP

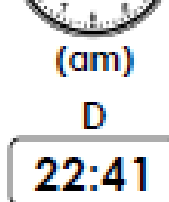
9b. Which of these times is the earliest?
Which of these times is the latest?



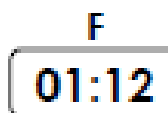
(am)



(am)



(pm)



VP