



Draw the hands on these clocks to show the exact time.

5.



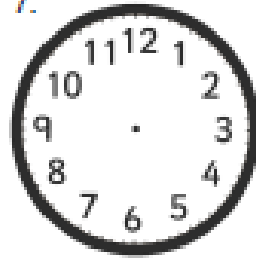
18 minutes past 3

6.



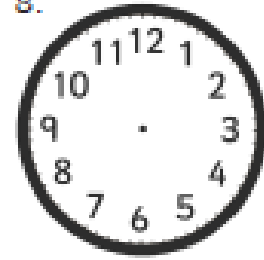
9 minutes past 10

7.



24 minutes past 8


8.



18 minutes past 4


9.

A train was supposed to arrive at 6 minutes past 3, but was delayed by 12 minutes. Draw on the hands to show when it will arrive.



10.

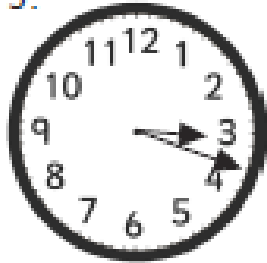
Another train was supposed to arrive at 3 minutes past 6, but was delayed by 24 minutes. Draw on the hands to show when it will arrive.



## Answers

Draw the hands on these clocks to show the exact time.

5.



18 minutes past 3

6.



9 minutes past 10

7.



24 minutes past 8


8.



18 minutes past 4

9.

A train was supposed to arrive at 6 minutes past 3, but was delayed by 12 minutes. Draw on the hands to show when it will arrive.



10.

Another train was supposed to arrive at 3 minutes past 6, but was delayed by 24 minutes. Draw on the hands to show when it will arrive.

