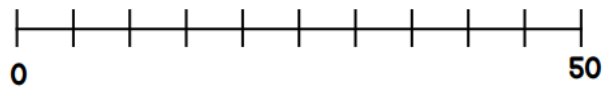
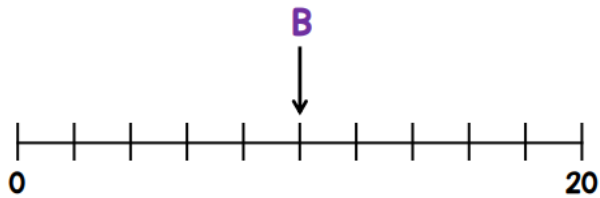
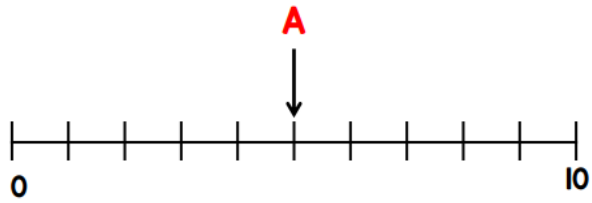


1 Given that $A + B = C$

Draw an arrow pointing to C



2 Amir has a box of 50 counters.

12 of the counters are red.

17 of the counters are blue.

The rest of the counters are yellow.

Which coloured counter are there more of?
