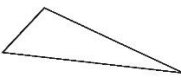
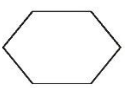
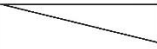

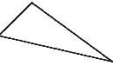

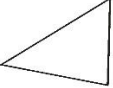
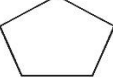



LO: I can solve shape problems.


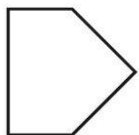
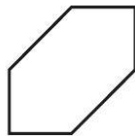
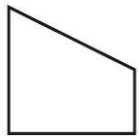
SC: I know the properties of 2D shapes.

1. These shapes have been sorted.

Put a cross (X) on the shape which is in the wrong place.

triangles	not triangles
	
	
	
	
	

2. Tick the **pentagon**.



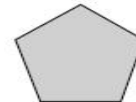
3. Find two shapes with only 5 straight sides.



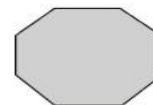
4. Draw lines to match the shapes to their names.



pentagon



triangle



octagon

hexagon