

Adding 3 numbers:

$$2 + 1 + 8 =$$

$$5 + 6 + 5 =$$


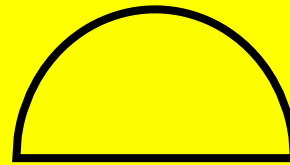





$$3 + 2 + 4 =$$



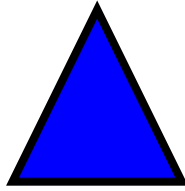


$$4 + 10 + 4 =$$

What are 2D shapes?

What words do we use to describe them?

Name these 2D shapes and their properties:





Curved side

Straight sides

