



# **Year 2 Maths 07/10/2020**






# Lesson Aims

- I can add a 2 digit number and a 1 digit number.
- I can write a number sentence using + and =.
- I can put the biggest number first.
- I count out the correct number of 10s and 1s using dienes.
- I count on in 1s.



# Fluency

Add on 10 to these numbers:



What do you notice about the tens and units when we add ten?



## Main Teaching

What words tell us what this symbol means?

+



## Main Teaching

What words tell us what this symbol means?

Addition

Altogether

Add

+

Plus


Total



## Main Teaching

Today we are going to use/draw the dienes.

$$15 + 4 = 19$$



Draw out 15. (One ten and 5 units)  
Then draw out 4 units underneath  
Add up the units.  
Add up the tens.



## Main Teaching

Have a go at drawing  
out your jottings for:

$$23+5=$$



# Your task...

Choose two numbers: One black and one red.

EG:  $34+4=$

Draw your jottings to work out the answer.

34	52	4	4
41	25	3	1
63	72	4	2
31	54	1	





**To finish things off...**

Check my jottings for me.

$$11+4=25$$

