



Year 2
Maths
17/07/2020



Fluency

Halve these numbers:

52

68

46



Main Teaching

Today we are going to think about our times tables.

We have been working really hard on our 2x 5x and 10x tables.

Have a go at some of the activities attached.



Main Teaching

Have a go at times table colouring. This sheet has 2x, 5x and 10x questions.

Remember we can do multiplication in any order.



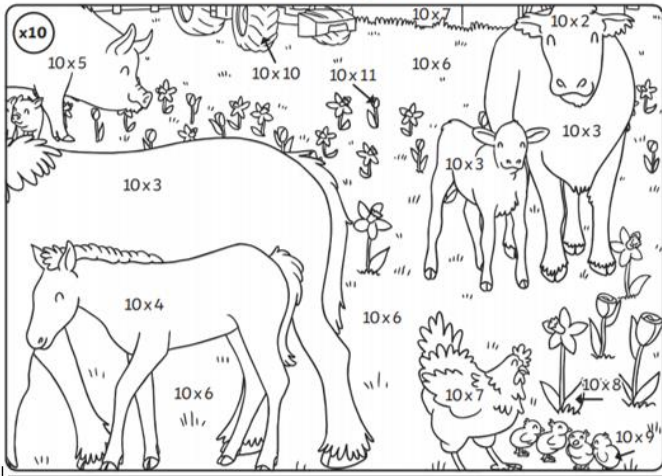
0-20 = pink
21-39 = orange
40-59 = green
60-80 = yellow
81-120 = blue



Main Teaching


Have a go at colouring for the 5x and 10 x tables.

Colour by Multiplication



20	white
30	brown
40	light brown
50	pink
60	light green
70	red
80	dark green
90	yellow
100	black
110	orange

Colour by Multiplication




10	light purple
15	white
20	dark purple
25	pink
30	dark green
35	pink
40	bright green
45	dark turquoise
50	light green



Main Teaching

Have a go at the times table challenge.

Which house does the Hansel and Gretel need to go to? ____



1	12	7	17
5	18	14	3
11	8	10	0
19	13	6	2

Find the answers to the multiplication calculations.

Colour the squares with your answers and help Hansel and Gretel find the right house.



Hansel and Gretel are lost. Can you help them find the way back home?

1. $2 \times 1 =$ ____
2. $2 \times 3 =$ ____
3. $2 \times 5 =$ ____
4. $2 \times 4 =$ ____
5. $2 \times 9 =$ ____
6. $2 \times 6 =$ ____
7. $2 \times 10 =$ ____

