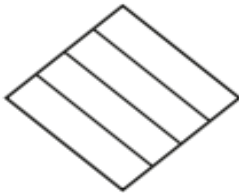
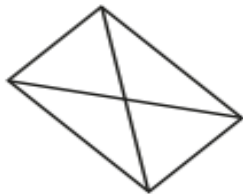
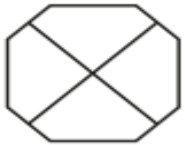
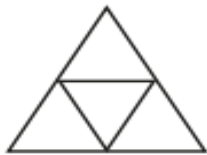
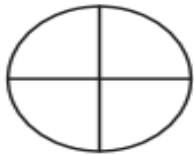


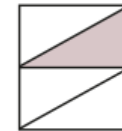
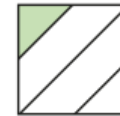
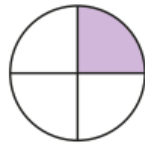
Task 1

Colour $\frac{1}{4}$ of each shape.



Task 2

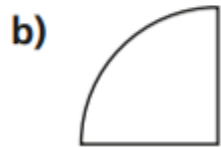
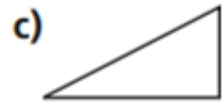
Tick the shapes that have $\frac{1}{4}$ shaded.



Task 3

Only $\frac{1}{4}$ of each shape has been drawn.

Draw the rest of each shape to make the whole shape.

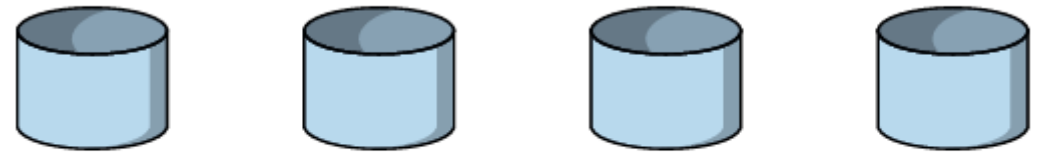


Task 4

There are 12 pencils.



a) Share them equally between 4 pencil pots.



b) What is $\frac{1}{4}$ of 12?