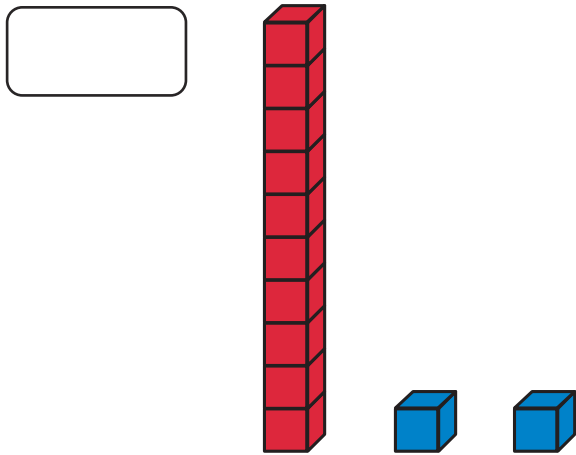


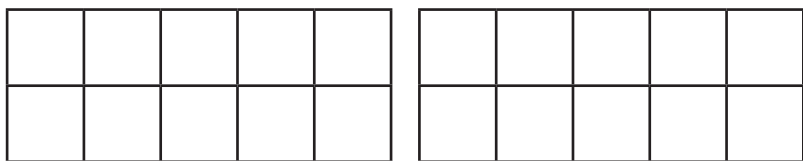
We recommend spending around 20 minutes on this homework.
Please do not worry if it is not completed :)
Thank you for your support.

Name: _____ Date: _____

1) Write the number to match the picture.



2) Draw counters on the ten-frames to represent the number 12.

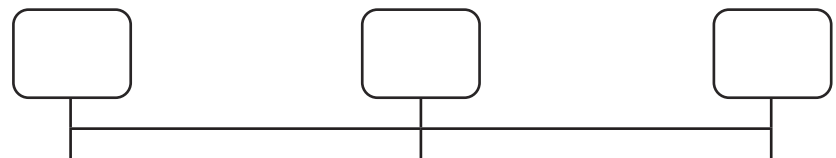


3) Count forwards.
Fill in the missing numbers.



1 mark

4) Compare and order the pencils from the shortest to the longest.



shortest

longest

1 mark

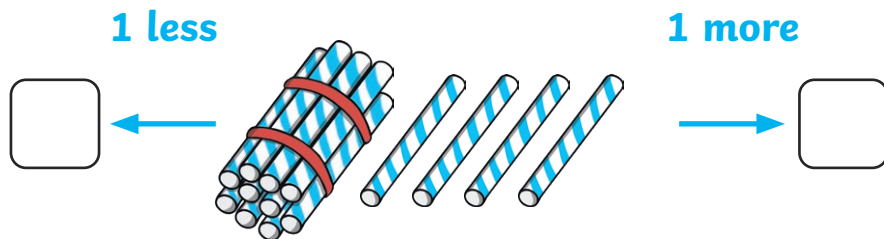
1 mark

1 mark

5) Count backwards.
Fill in the missing numbers.


1 mark

6) Find 1 more and 1 less than the number of straws.



1 mark

7) How many bricks tall is the toy truck?



The toy truck is bricks tall.

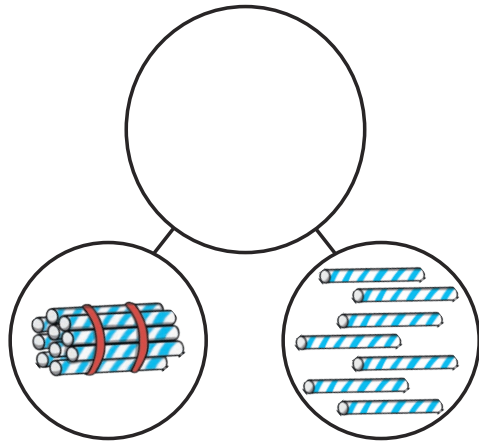
1 mark

8) Draw lines to match number words with the numerals.



seventeen	19
eleven	11
nineteen	20
twenty	17

2 marks


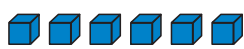

- 9) 10 is a part and 7 is a part.
What is the **whole number**?
Write the whole number in the space.



- 10) Complete the number sentences.



 + =

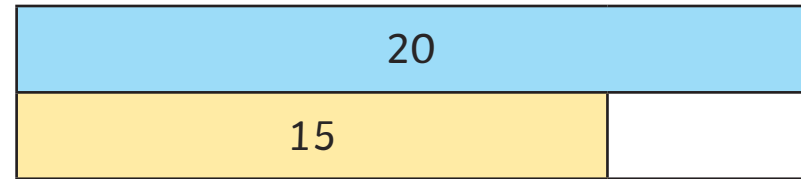
so,




 + =

1 mark

1 mark

- 11) Find the missing number and finish the number sentence.

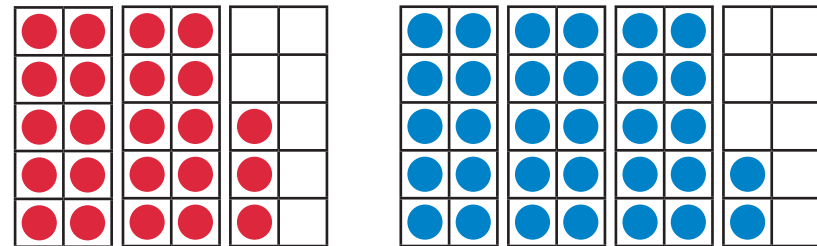


15 + = 20

1 mark

- 12) Compare the groups.

< less than > greater than = equal to



Tick the sentence that is true.

23 = 32

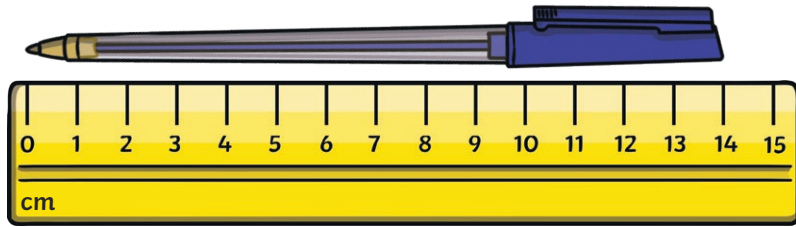
23 > 32

23 < 32

1 mark

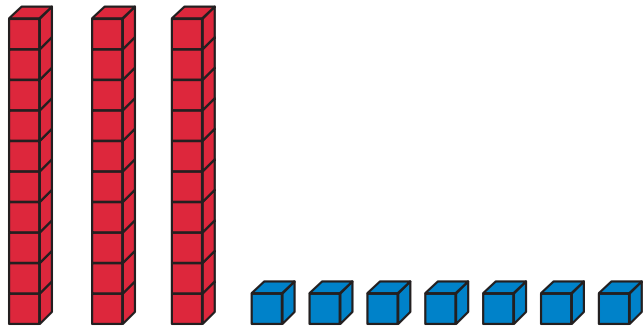
1 mark

13) How long is the pen?



The pen is cm long.

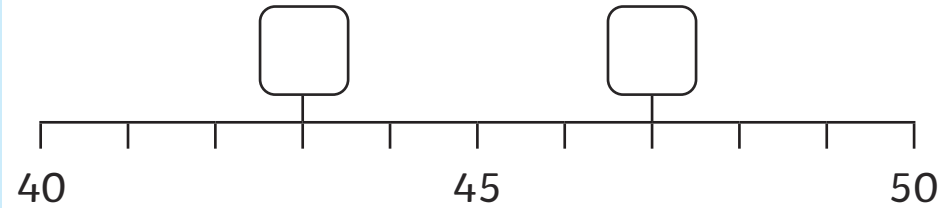
14) Find 1 less and 1 more than this number.



is 1 less than .

1 more than is .

15) Write the numbers in the spaces.



1 mark

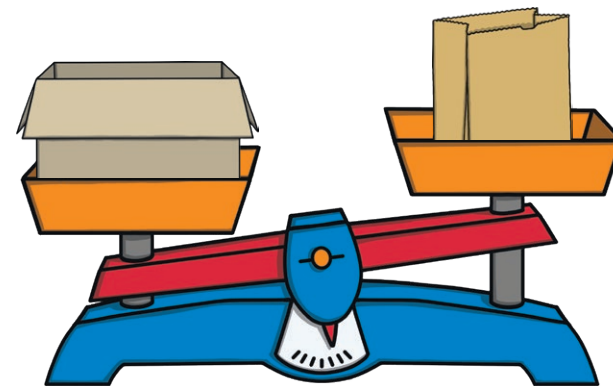
1 mark

16) Complete the sentence.

lighter

heavier

equal to




The box is than the bag.

1 mark

1 mark


17) What is the mass of the toy car?



The toy car has a mass of blocks.

18) I roll double 6.

What is the total?




$$6 + 6 = \text{$$

19) Cross pictures out to finish the story.



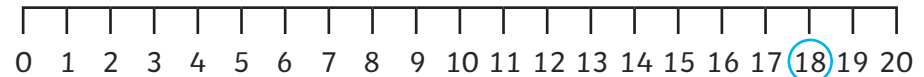
I had 16 blueberries.
Then I ate 5.



How many are left?

20) Use the number line to find the answer.

$$18 - 4 = \text{$$



21) Write a number sentence to match this picture.

Which symbols will you use? $+$ $-$ $=$

●	●		
●	●		
●	●		
●	●		
●	●		

●	
●	●
●	●
●	●
●	●

1 mark

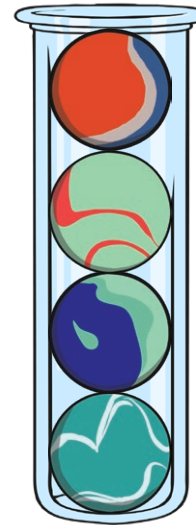
22) Match the labels with the volumes of juice in each bottle.



full half full empty

1 mark

23) What is the capacity of the tube?



The tube has a capacity of marbles.

1 mark

Total 24 marks