

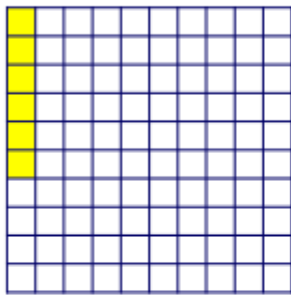


Q1

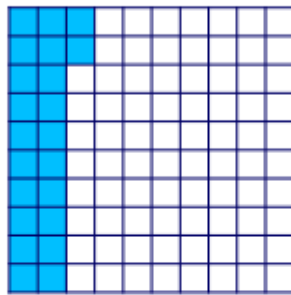
What percentage of each hundred square is shaded?

[ /3]

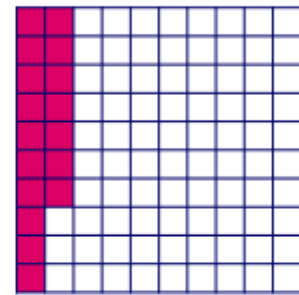
$\frac{0}{5}$



%



%



%

Q2

Q3

Q4

No calc



Total

$\frac{0}{27}$

What percentage of each bar model is shaded?

[ /2]



%



%

Mark it



Q1

Match the equivalent percentages and fractions.

[ /8]

Q2

$\frac{0}{8}$

$\frac{2}{100}$

53%

$\frac{1}{5}$

40%

Q3

Q4

No calc



Total

$\frac{0}{27}$

$\frac{1}{2}$

50%

$\frac{42}{100}$

75%

42%

$\frac{8}{10}$

$\frac{4}{10}$

2%

20%

$\frac{53}{100}$

$\frac{3}{4}$

80%



Q1

Match the equivalent percentages and decimals.

[ /6]

Q2

39%

0.9

Q3

30%

0.39

 $\frac{0}{6}$ 

Q4

9%

0.03

No  
calc

90%

0.09



93%

0.93

Total

3%

0.3

 $\frac{0}{27}$ 

Mark it



Q1

Complete the table.

[ /8]

Q2

Q3

Q4

 $\frac{0}{8}$ No  
calc

Total

 $\frac{0}{27}$ 

Fraction	Decimal	Percentage
$\frac{1}{2}$	<input type="text"/>	<input type="text"/> %
<input type="text"/>	<input type="text"/>	70%
$\frac{1}{4}$	<input type="text"/>	<input type="text"/> %
<input type="text"/>	0.4	<input type="text"/> %

Mark it