


# Describe the Groups


To describe equal groups.

Complete the sentences to describe the groups. Then write your own sentences describing the number of groups and the number of stars in each.




There are \_\_\_\_\_ equal groups.


There are \_\_\_\_\_ stars in each group.



There are \_\_\_\_\_ groups of \_\_\_\_\_.




There are \_\_\_\_\_ groups of \_\_\_\_\_.



\_\_\_\_\_


\_\_\_\_\_



True or false?

There are 3 groups of 6.

\_\_\_\_\_



\_\_\_\_\_

\_\_\_\_\_