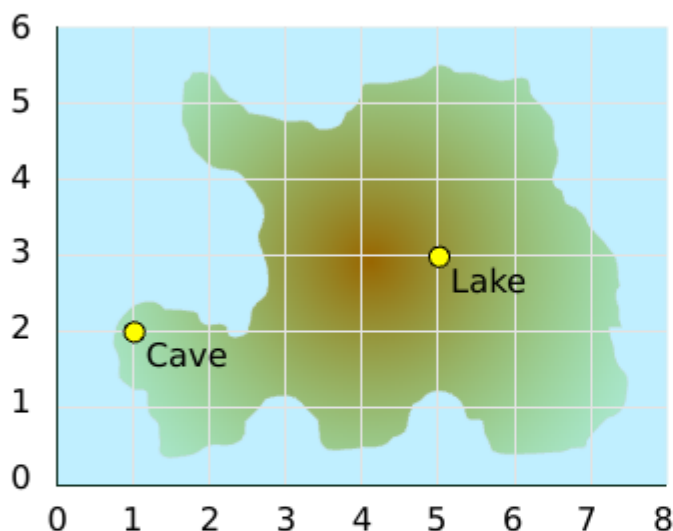




Q1

$\frac{0}{8}$



What are the coordinates of these places?

Cave (,) [2]

Lake (,) [2]

Drag the dots to the correct places on the map.

(3, 3) (4, 5)

Position of (3, 3) [2]

Position of (4, 5) [2]

Mark it

Q2

$\frac{0}{7}$

No calc



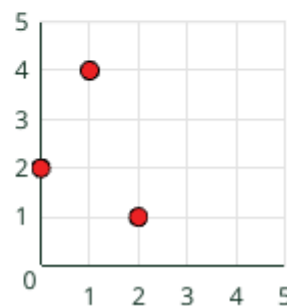
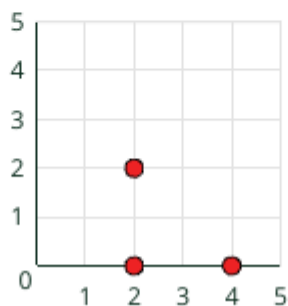
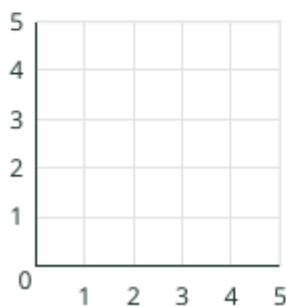
Total

$\frac{0}{15}$



Q1

$\frac{0}{8}$



Drag the coordinates of the triangle ABC onto the grid.

- A: (0, 1)
- B: (1, 2)
- C: (2, 4)

[3]

The last vertex of this square is:

(,)

[2]

The last vertex of this square is:

(,)

[2]

Q2

$\frac{0}{7}$

No calc



Total

$\frac{0}{15}$

Mark it