



Q1

0/8

Label the angles.

- acute
- right
- obtuse
- straight
- reflex

[8]

Q2

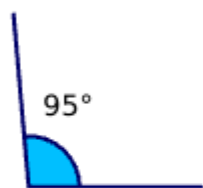
0/6

No calc



Total

0/14




?



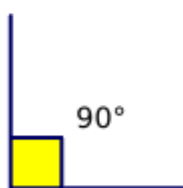
?



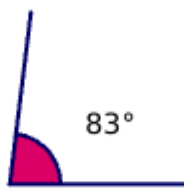
?



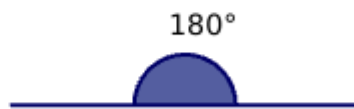
?



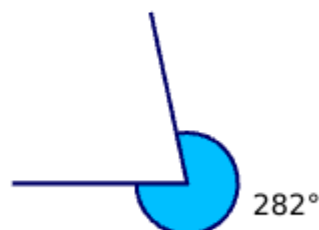
?



?



?



?

Mark it

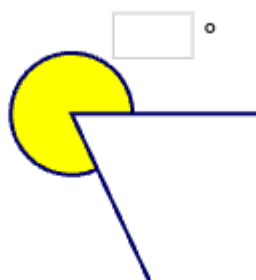
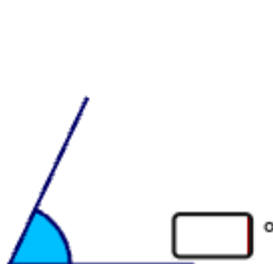


Q1

0/8

Estimate the size of each angle. You must be within 10 degrees.

[3]



Q2

0/6

No calc



Total

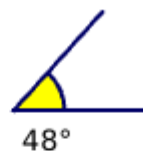
0/14

Compare the angles using the symbols.

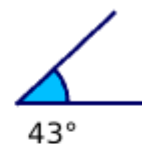
- >
- <



?



?



?



Mark it