

DUE in by Friday 12<sup>th</sup> June (very latest)





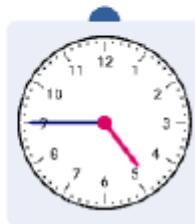
2 house points if mymaths/edshed completed by Wednesday!!!

You can complete this on my maths as well as on the paper.




Remember to play TTRS to practice your multiplication tables.

You can play the time game on <https://mathsframe.co.uk/en/resources/resource/117/telling-the-time-in-words>

Match the times to the clocks.






quarter past 11	quarter to 4	quarter to 5	quarter past 6	quarter to 9
				

Draw the hands on the clocks

quarter past 2	quarter past 2	quarter past 2
		

Draw hands on the clocks to show the time

Match the times to the clocks.

quarter to 3	quarter to 11	quarter past 4	quarter past 8	quarter past 7
				

Match the times to the clocks.

five past 4

five to 2

twenty-five past 3

10 minutes to 11

10 minutes past 11



Complete the sentence: There are  minutes in an hour.

twenty to 6

5 minutes to 4

twenty past 6



Match the times to the clocks.

10 minutes past 10

twenty-five past 8

10 minutes to 10

twenty-five to 2

twenty past 5

